

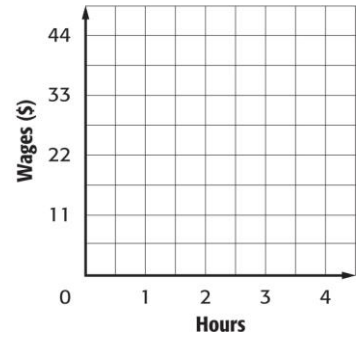
Skills Practice

Slope

Graph the data. Then find the slope. Explain what the slope represents.

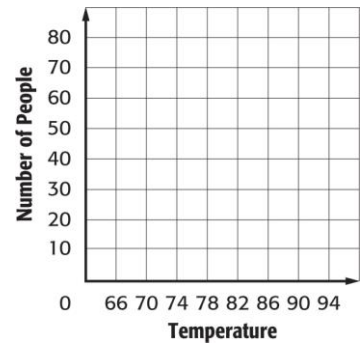
1.

Hours	1	2	3	4
Wages (\$)	11	22	33	44

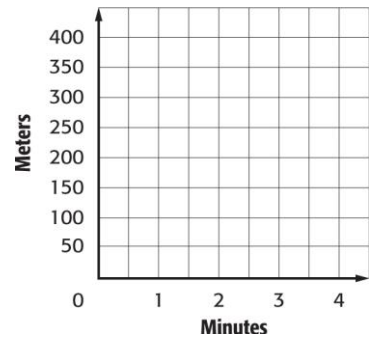


2.

Temperature (°F)	70	78	86	94
Number of People on Beach	24	40	56	72



3. **SWIMMING** Latonya swims 50 meters in $\frac{1}{2}$ minute.



4. **SONGS** Find the slope of the line on the graph showing the cost to download songs.

